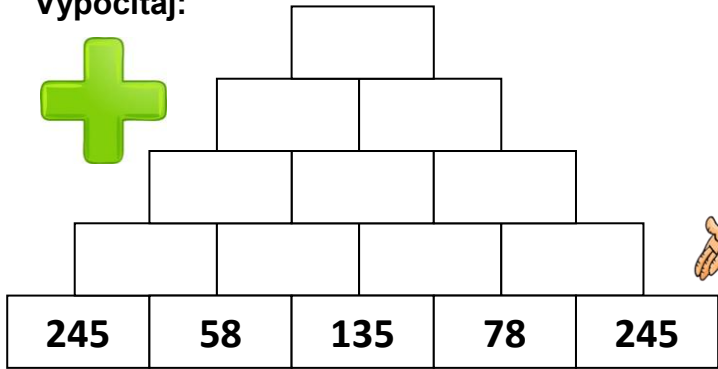


Vypočítaj:

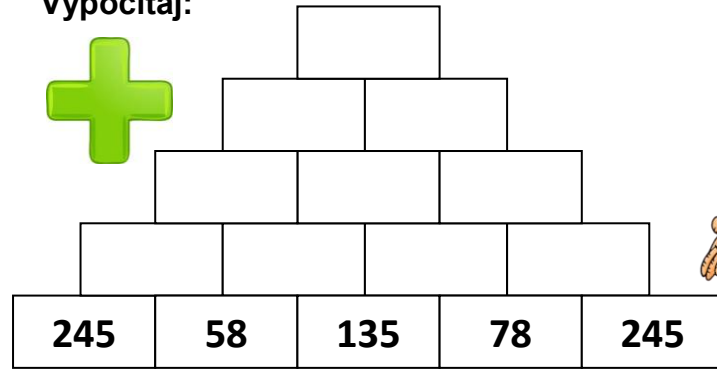


4 . 6 = \_\_\_\_\_ 5 . 7 = \_\_\_\_\_ 36 : 4 = \_\_\_\_\_

8 . 3 = \_\_\_\_\_ 7 . 8 = \_\_\_\_\_ 45 : 5 = \_\_\_\_\_

54	67	83	173	206	415
<u>. 3</u>	<u>. 7</u>	<u>. 9</u>	<u>. 8</u>	<u>. 4</u>	<u>. 6</u>

Vypočítaj:

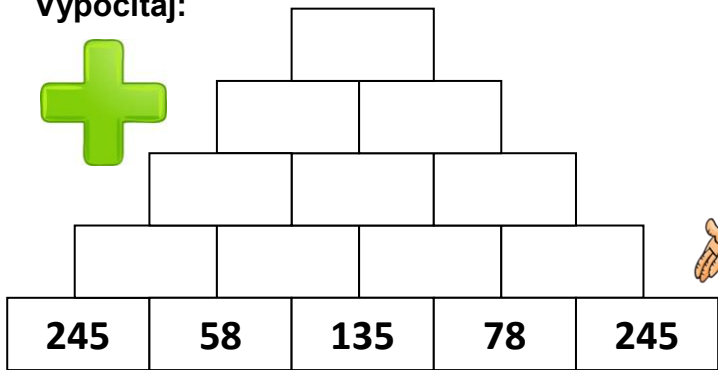


4 . 6 = \_\_\_\_\_ 5 . 7 = \_\_\_\_\_ 36 : 4 = \_\_\_\_\_

8 . 3 = \_\_\_\_\_ 7 . 8 = \_\_\_\_\_ 45 : 5 = \_\_\_\_\_

54	67	83	173	206	415
<u>. 3</u>	<u>. 7</u>	<u>. 9</u>	<u>. 8</u>	<u>. 4</u>	<u>. 6</u>

Vypočítaj:

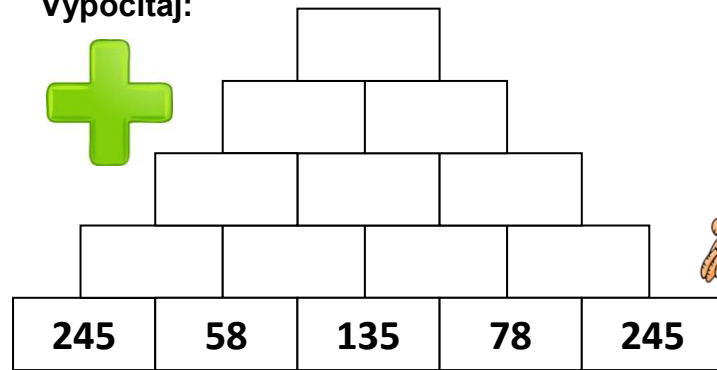


4 . 6 = \_\_\_\_\_ 5 . 7 = \_\_\_\_\_ 36 : 4 = \_\_\_\_\_

8 . 3 = \_\_\_\_\_ 7 . 8 = \_\_\_\_\_ 45 : 5 = \_\_\_\_\_

54	67	83	173	206	415
<u>. 3</u>	<u>. 7</u>	<u>. 9</u>	<u>. 8</u>	<u>. 4</u>	<u>. 6</u>

Vypočítaj:



4 . 6 = \_\_\_\_\_ 5 . 7 = \_\_\_\_\_ 36 : 4 = \_\_\_\_\_

8 . 3 = \_\_\_\_\_ 7 . 8 = \_\_\_\_\_ 45 : 5 = \_\_\_\_\_

54	67	83	173	206	415
<u>. 3</u>	<u>. 7</u>	<u>. 9</u>	<u>. 8</u>	<u>. 4</u>	<u>. 6</u>